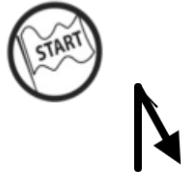


0,00



Go back on concrete.

1 0,00

0,55



Go right at the end of concrete.

2 0,55

0,75



Go right.
What is that "rusty" thing on the left?

3 0,20

1,35



Keep right.

4 0,60

2,07



Go straight.

5 0,72

2,21



Go right.

6 0,14

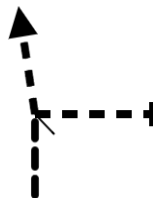
2,44



"Left they also call me,
a refuge I give,
for resting I'm needed,
a wine I could be"

7 0,23

3,19



Continue straight.

8 0,74



3,62



Do you see that small farm on the right side?

9

0,43

3,89

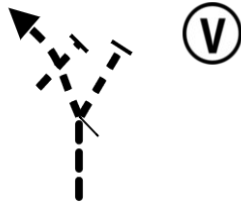


Keep straight.

10

0,27

4,02

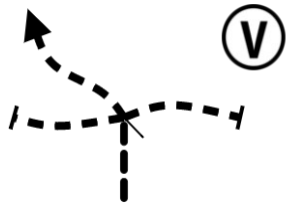


Go left and few meters later cross next road.

11

0,13

4,09



Take the slightly left road.

12

0,07

4,63

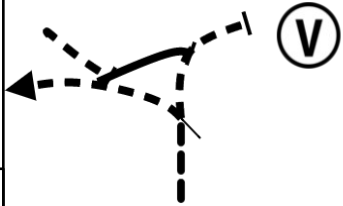


Continue straight.

13

0,54

5,57



Looks complicated? No worries. Just turn left and keep left.

14

0,94

6,11



Keep straight.

15

0,54

7,06



Keep straight.

16

0,95

7,19



Ignore the small path to the right and keep straight.

17 0,13

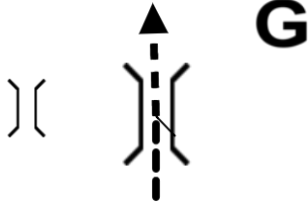
7,78



Keep right.

18 0,59

8,40



Take a selfie in front of the old (!) bridge. Any idea what it is called?

19 0,62

8,48



Keep straight.

20 0,08

8,56



Go right.

21 0,08

8,73



Go left.

22 0,17

8,86



Keep straight.

23 0,13

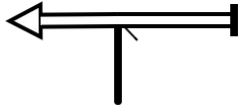
9,55



Keep straight.

24 0,69

9,78

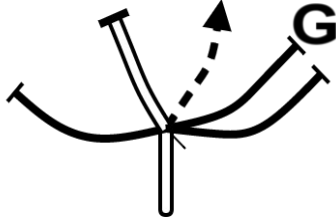


Puh! That was a bumpy ride. Back to civilization. Go left on main road.

25

0,23

12,23



Before you proceed, can you answer what is the length of Chapotami river? _____ km
Go right from the main road and go down hill into the off road.

26

2,45

12,81



Keep right.

27

0,58

12,92



For the normal route, go straight! Or take challenge No 2: Go right to do something more "interesting".

28

0,11

13,34

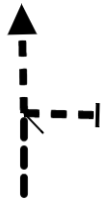


Let's see how well you know your car.

29

0,42

13,39

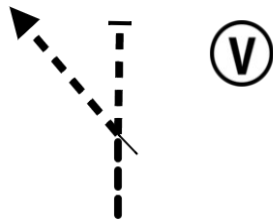


Go straight. On your right is the exit of challenge No 2. Doesn't look like a road, correct?

30

0,05

13,99

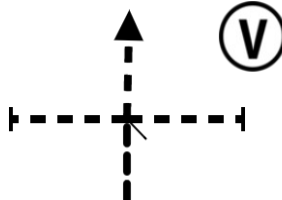


Go left.

31

0,60

14,03



Go straight. Cross the larger road.

32

0,04

PROXIMA NOTA
PROCH NOTE
NEXT NOTE

0,37

14,40



Make a U-turn to reach the lower road.

33

0,37

14,73



Go straight.

34

0,33

16,09



Turn slightly right to get on main road.

35

1,36

17,94



Enough of this tarmac! Take U-turn to go off-road.

36

1,85

18,11

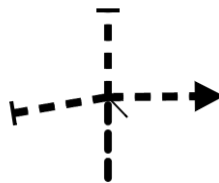


Take a sharp bend to the right.

37

0,17

18,29



Go right.

38

0,18

18,38



Continue straight on gravel.

39

0,09

18,54

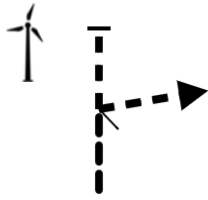


Turn right to leave grey gravel and go off road again.

40

0,16

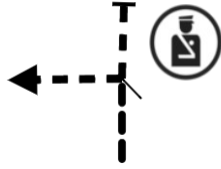
18,64



Go right.

41 0,10

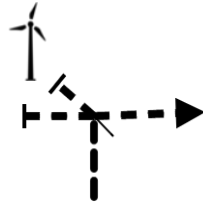
18,92



Go left. Or you can try our 3rd challenge by going straight from this point. Or just watch one of the others ...

42 0,28

19,05



Go right.

43 0,13

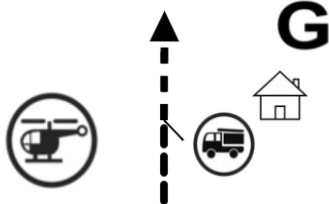
19,23



Keep left.

44 0,18

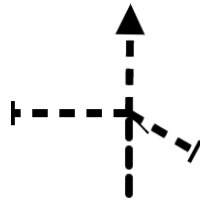
19,31



1. Post a panorama photo to #cyprusshippingrally
2. How many windmills can you see? ____

45 0,08

19,42



Continue straight down the hill.

46 0,11

19,58



Continue straight.

47 0,16

19,68



Yes, that one is confusing. Luckily most of these are dead ends.

48 0,10

PROXIMA NOTA
PROCH NOTE
NEXT NOTE 0,54

20,22



Go left.

49

0,54

20,49



Go right.

50

0,27

21,00

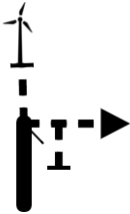


Go right on gravel road.

51

0,51

21,09

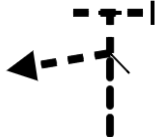


Go right and ignore the track directly to the right.

52

0,09

21,28

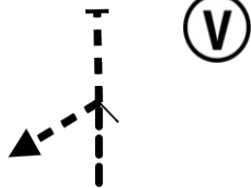


Go left.

53

0,19

21,94



Go left up the hill in a more narrow road.

54

0,66

22,02



G

Go right on gravel.

What are the "names" of the two wind mills ahead? ___ and ___

55

0,08

22,32



G

Can you estimate the height of the windmill? _____ m

56

0,30

22,40




Search for trail behind the second wind mill. Believe us, there is a trail going down! Then go right.

57

0,08

22,59



Post another panorama photo! Turn on the right road. Watch out! Turning left will take you directly to a cliff.

58

0,19

22,94



Keep left.

59

0,35

23,23

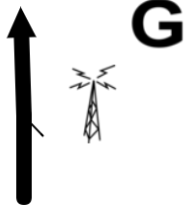


Go left and join the newly made road. Looks like they are building a highway here.

60

0,29

24,17



What is powering the antenna to the right?

61

0,94

24,30



Lets have some fun ...

62

0,13

25,10

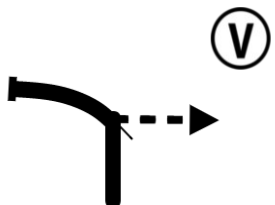


Go right.

63

0,80


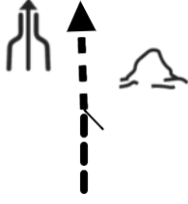
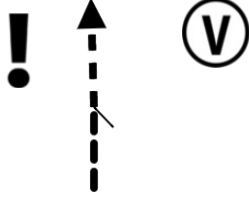

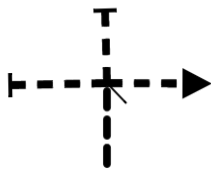



25,31




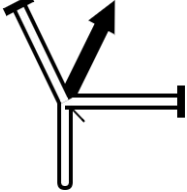

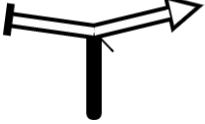
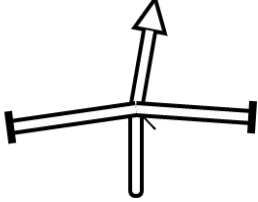
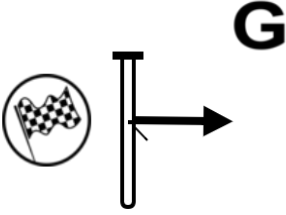
Turn right to leave the newly made road to go off road again.

64

0,21

<p>25,40</p> <p>65 0,09</p>		<p>To the right is a dead end. Go immediately left.</p>
<p>26,01</p> <p>66 0,61</p>		<p>To the right heaps of dirt. Keep straight. The road becomes narrow from this point on.</p>
<p>26,21</p> <p>67 0,20</p>		<p>Doesn't look like a road, but it is. Drive slowly down the hill and watch for holes. Stay on the right side of the road.</p>
<p>26,61</p> <p>68 0,40</p>		<p>Keep straight.</p>
<p>26,89</p> <p>69 0,28</p>		<p>Go right.</p>
<p>27,23</p> <p>70 0,34</p>		<p>Turn left.</p>
<p>27,57</p> <p>71 0,34</p>		<p>Keep straight Q: Name the place you see straight ahead! _____</p>
<p>27,85</p> <p>72 0,28</p>		<p>Keep straight. You must be now on concrete.</p>



<p>28,04</p> <p>73 0,19</p>		<p>Go left on main road.</p>
<p>28,06</p> <p>74 0,02</p>		<p>Take middle gravel road. Keep on gravel road.</p>
<p>28,47</p> <p>75 0,41</p>		<p>Turn right.</p>
<p>28,50</p> <p>76 0,03</p>		<p>Go right on the main road.</p>
<p>28,53</p> <p>77 0,03</p>		<p>Go straight on the main road.</p>
<p>28,57</p> <p>78 0,04</p>		<p>You've made it! Park your car. Maybe we play a last game?</p>

29 Km

78 Waypoints

29 Km Fuel Range

G

Last question, we promise!

Time to make use of all those stamps you gathered today.
Ignore all the stamps from any challenging routes (Challenge 1 – 3) and use the remaining
Stamps to form a 7 letter shipping related word.

— — — — — — —